

Year 1 Maths Activity Mat

5

Section 1

Jed had 7 football stickers.

Jamie had double that.

How many stickers did Jamie have?



Section 2

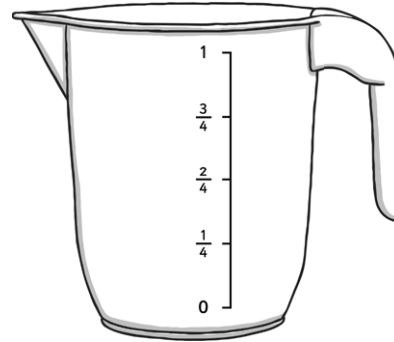
I buy a packet of cakes for £2.

How much would 2 packets cost?



Section 3

Colour in the juice to show the jug is one quarter full.



Section 4

Share these bananas equally into 4 groups.



How many bananas in each group?

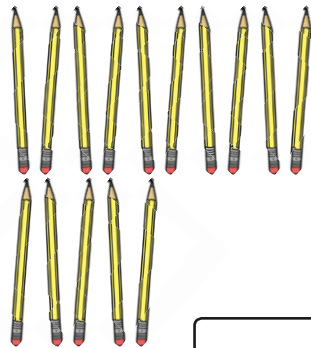
Section 5

How long is the pencil?



Section 6

How many lots of ten are there in 15?



Section 7

Maya is 7 years old.

Her sister is 4 years older.

How old is her sister?

Section 8

8 tomatoes were shared equally onto each slice.

How many tomatoes were on each slice?



Year 1 Maths Activity Mat: 5

Answers

Section 1

Jed had 7 football stickers.

Jamie had double that.

How many stickers did Jamie have?



14

Section 2

I buy a packet of cakes for £2.


How much would 2 packets cost?



£4

Section 3

Colour in the juice to show the jug is one quarter full.



Section 4

Share these bananas equally into 4 groups.



How many bananas in each group?

2

Section 5

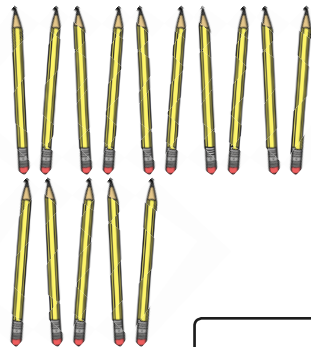
How long is the pencil?



6cm

Section 6

How many lots of ten are there in 15?



1

Section 7

Maya is 7 years old.

Her sister is 4 years older.

How old is her sister?

11

Section 8

8 tomatoes were shared equally onto each slice.

How many tomatoes were on each slice?



2

Year 1 Maths Activity Mat

5

Section 1

Jed had 14 football stickers.

Jamie had double that.

How many stickers did Jamie have?



Section 2

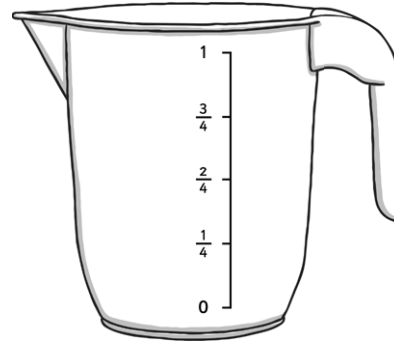
I buy a packet of cakes for £2.

How much would 3 packets cost?




Section 3

Colour in the juice to show the jug is half full.



Section 4


Share these bananas equally into 4 groups.



How many bananas in each group?


Section 5

How long is the pencil?



Section 6

How many lots of ten are there in 20?



Section 7

Maya is 12 years old.

Her sister is 4 years older.

How old is her sister?

Section 8

16 tomatoes were shared equally onto each slice.

How many tomatoes were on each slice?



Year 1 Maths Activity Mat: 5

Answers

Section 1

Jed had 14 football stickers.

Jamie had double that.

How many stickers did Jamie have?



28

Section 2

I buy a packet of cakes for £2.

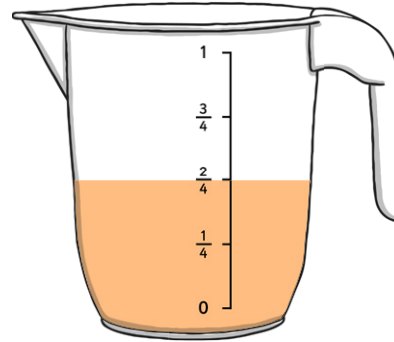
How much would 3 packets cost?



£6


Section 3

Colour in the juice to show the jug is half full.



Section 4

Share these bananas equally into 4 groups.

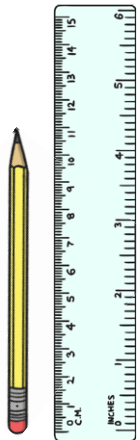


How many bananas in each group?

4

Section 5


How long is the pencil?



11cm

Section 6

How many lots of ten are there in 20?



2

Section 7

Maya is 12 years old.

Her sister is 4 years older.

How old is her sister?

16

Section 8

16 tomatoes were shared equally onto each slice.

How many tomatoes were on each slice?



4

Year 1 Maths Activity Mat

5

Section 1

Jed had 22 football stickers.

Jamie had double that.

How many stickers did Jamie have?



Section 2

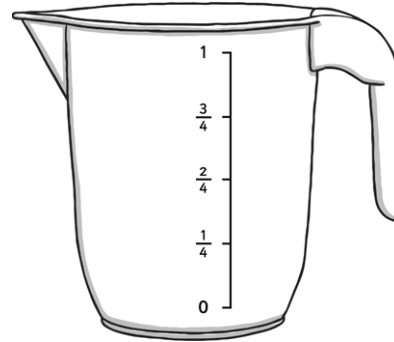
I buy a packet of cakes for £2.

How much would 7 packets cost?




Section 3

Colour in the juice to show the jug is $\frac{3}{4}$ full.



Section 4

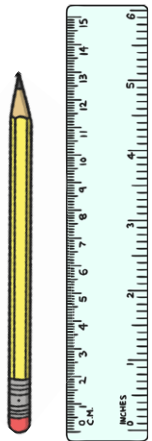
Share these bananas equally into 4 groups.



How many bananas in each group?


Section 5

How long is the pencil?



Section 6

How many lots of 12 are there in 36?



Section 7

Maya is 15 years old.

Her sister is 4 years older.

How old is her sister?

Section 8

20 tomatoes were shared equally onto each slice.

How many tomatoes were on each slice?



Year 1 Maths Activity Mat: 5

Answers

Section 1

Jed had 22 football stickers.

Jamie had double that.

How many stickers did Jamie have?



44

Section 2

I buy a packet of cakes for £2.

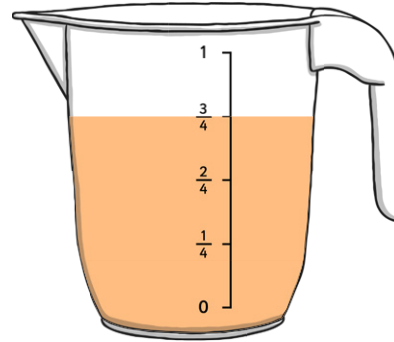
How much would 7 packets cost?



£14


Section 3

Colour in the juice to show the jug is $\frac{3}{4}$ full.



Section 4

Share these bananas equally into 4 groups.

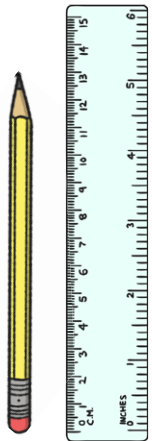


How many bananas in each group?

5

Section 5


How long is the pencil?



13cm

Section 6

How many lots of 12 are there in 36?



3

Section 7

Maya is 15 years old.

Her sister is 4 years older.

How old is her sister?

19

Section 8

20 tomatoes were shared equally onto each slice.

How many tomatoes were on each slice?



5